


1. Which attribute could you measure with the tool shown?



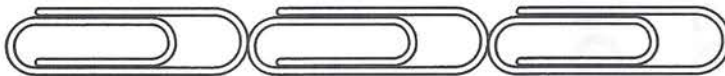
- (A) capacity
- (B) length
- (C) weight
- (D) cost



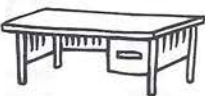

2. Subtract  
What is the difference?

$$\begin{array}{r} \square \quad \square \\ 7 \quad 8 \text{ ¢} \\ - 5 \quad 9 \text{ ¢} \\ \hline \end{array}$$

- (A) 9¢
- (B) 19¢
- (C) 21¢
- (D) 29¢

3. Seth finds an object that is about 3 paper clips long. Which object did Seth find?



- (A) 
- (B) 
- (C) 
- (D) 

4. Felix has 60¢. He wants to buy the cap and the banner. Does he have enough money?

\_\_\_\_\_

